






Anna buys 3 boxes of cakes.

Each box has 5 cakes in it.

How many cakes does Anna buy altogether?

Which number sentences represent what Anna buys?

$$3 \times 5 = \quad 3 + 5 = \quad 5 + 5 + 5 =$$

 <p>Retrieve</p>	<p>How many cakes are in each box?</p>
 <p>Interpret</p>	<p>Draw a simple picture to represent what Anna buys.</p>
 <p>Choice</p>	<p>The creator included a number sentence that does not match what Anna buys. What mistake does the creator think some children might make?</p>